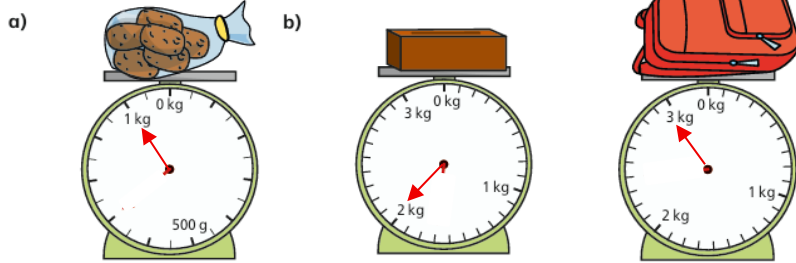



**Homework w/c 11<sup>th</sup> May 2026 - Mass**

Answer these questions in your blue maths homework book.

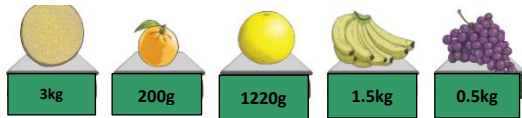
**Base Camp:** What is the mass of each object? <sub>c)</sub>



**Climbing:** What is the mass of each object?



**Peak:** Put the fruit in order from lightest to heaviest



**Summit:** Use >, < or = to complete these statements

250g        250kg

1000g        1kg

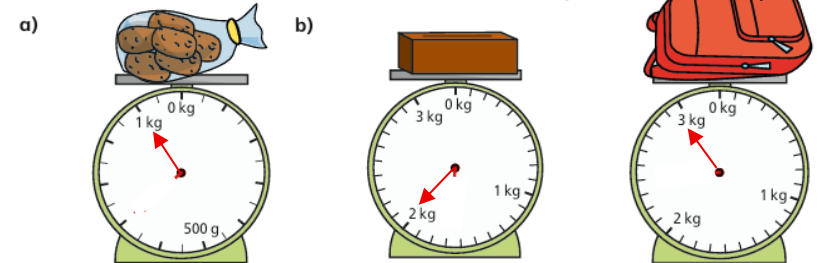
$2\frac{1}{2}$  kg        2400g

0.75kg        600g

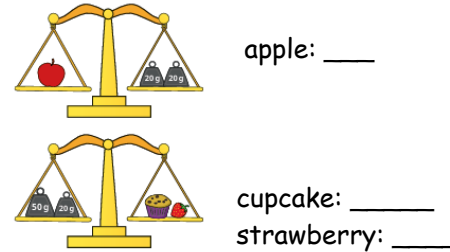
**Homework w/c 11<sup>th</sup> May 2026 - Mass**

Answer these questions in your blue maths homework book.

**Base Camp:** What is the mass of each object? <sub>c)</sub>



**Climbing:** What is the mass of each object?



**Peak:** Put the fruit in order from lightest to heaviest



**Summit:** Use >, < or = to complete these statements

250g        250kg

1000g        1kg

$2\frac{1}{2}$  kg        2400g

0.75kg        600g

