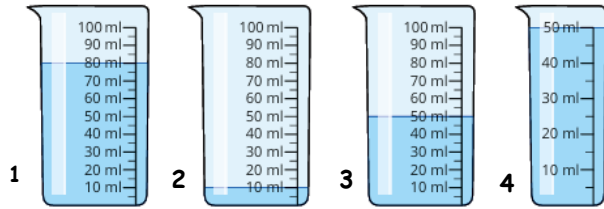


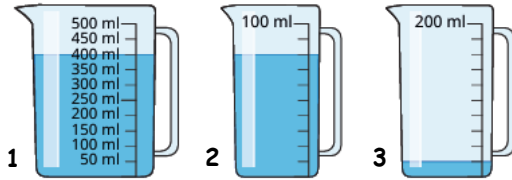
Homework w/c 18th May 2026 - Volume & Capacity
 Answer these questions in your blue maths homework book.

Base Camp:



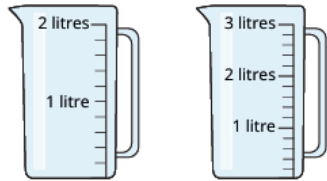
Climbing:

What is the volume of water in each jug?



Peak:

Shade the jugs to show where the water will reach.

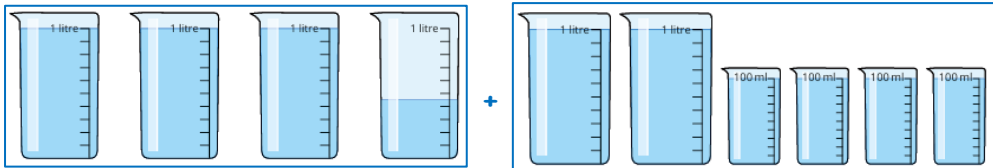


1 l and 400 ml 2 l and 900 ml

Label the missing divisions on the jugs.

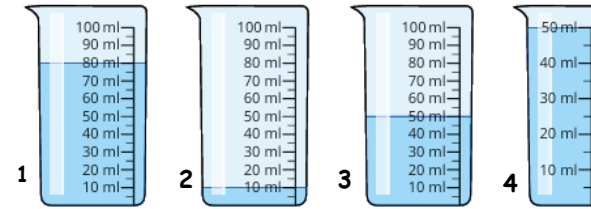


Summit: How much water is there in each set of beakers? What is the total of both sets



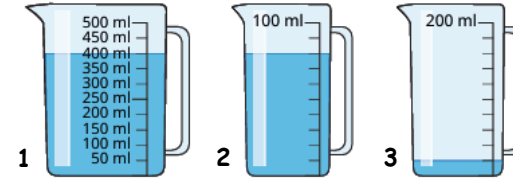
Homework w/c 18th May 2026 - Volume & Capacity
 Answer these questions in your blue maths homework book.

Base Camp:



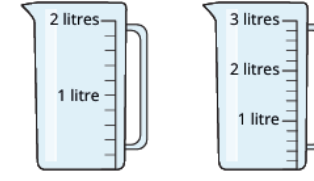
Climbing:

What is the volume of water in each jug?



Peak:

Shade the jugs to show where the water will reach.



1 l and 400 ml 2 l and 900 ml

Label the missing divisions on the jugs.



Summit: How much water is there in each set of beakers? What is the total of both sets?

