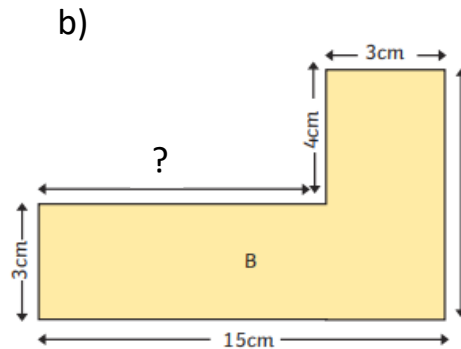
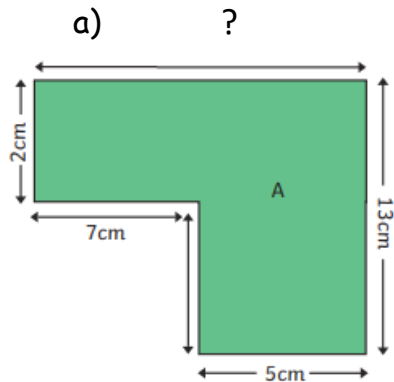


Maths- Length and perimeter - 19th January 2026

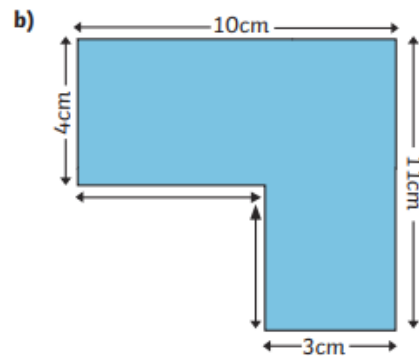
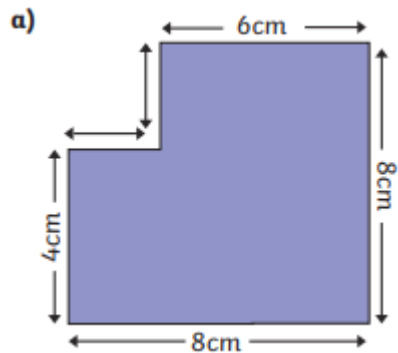
Base camp

Work out the missing length of these shapes

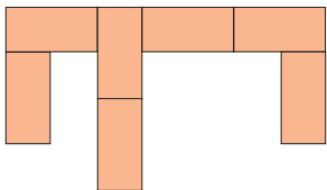


Climbing

Work out the missing lengths of these shapes



Peak



This shape is made using seven identical rectangles.
The length of each rectangle is 12cm and the width is 6cm.

Calculate the perimeter of the rectilinear shape.

SPaG- Conjunctions - 19th January 2026

Basecamp

Underline the conjunctions in these sentences

1. I wanted to play outside but it was raining.
2. She likes reading and drawing.
3. You can have desert if you finish your dinner.

Climbing

Use a coordinating conjunction to fill in the gap (FANBOYS)

1. I went to bed very late _____ I am tired today.
2. I listened to the weather forecast _____ put an umbrella in my bag.
3. I enjoy playing hockey _____ it's not my favourite sport.
4. We could go to the park _____ to the cinema.

Peak

Circle the correct conjunction

1. I was hungry (and/because) I missed lunch.
2. He ran fast (but/so) he could catch the bus.
3. We will eat dinner (so/while) the football is on.