


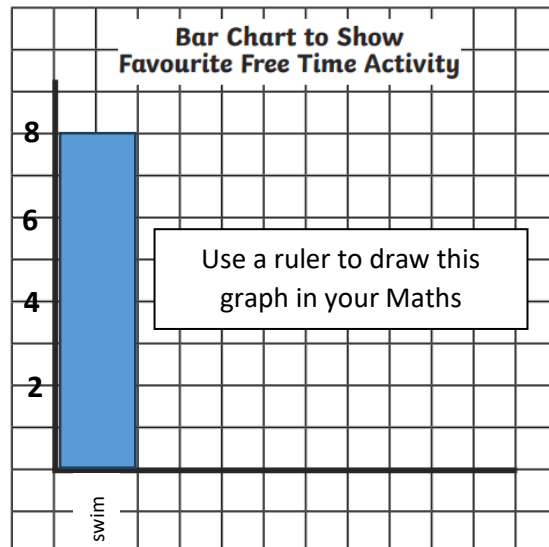
Y5 Homework w/c W1 01-06-26

30 children were asked to choose what their favourite activity for a free afternoon at home would be. Here are their answers.




1. Fill in the tally chart and then calculate the total of each response.
2. Draw a bar chart to present your data.

Activity	Tally	Total
Swimming	### III	
Trip to the park	Use a ruler and copy (and complete) this table into your Maths Homework Book.	
Play computer games		
Baking		
Reading		



Y5 Homework w/c W1 01-06-26

30 children were asked to choose what their favourite activity for a free afternoon at home would be. Here are their answers.



1. Fill in the tally chart and then calculate the total of each response.
2. Draw a bar chart to present your data.

Activity	Tally	Total
Swimming	### III	
Trip to the park	Use a ruler and copy (and complete) this table into your Maths Homework Book.	
Play computer games		
Baking		
Reading		

